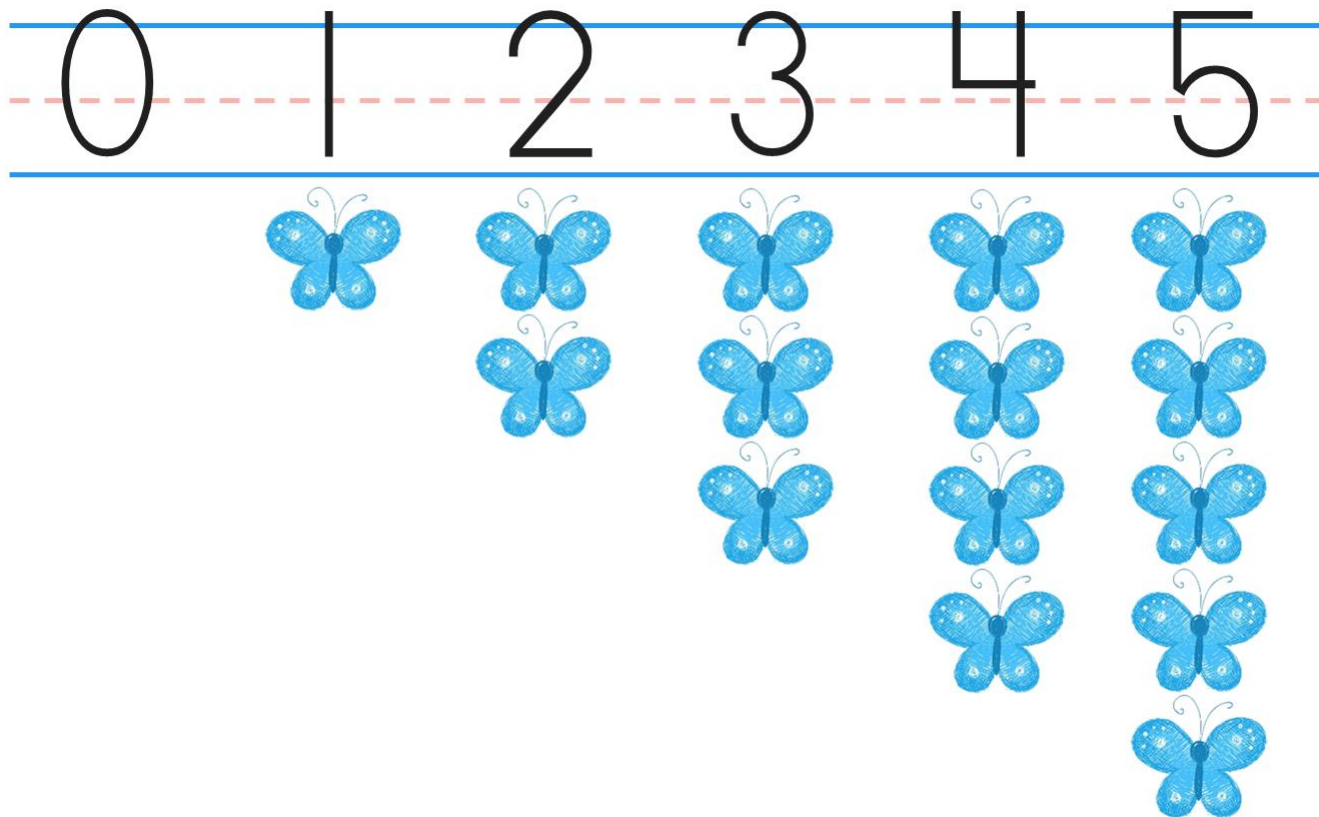


A **number** is a way to **write** an **amount of objects**.



- 1 Listen to how many objects there are.
- 2 Write the number of objects.
- 3 Write the number of objects four more times.

0

1

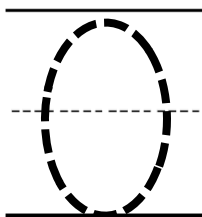
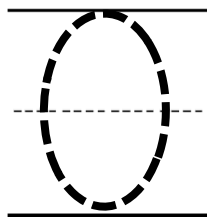
2

3

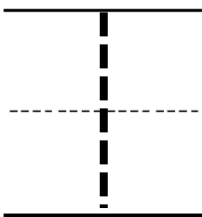
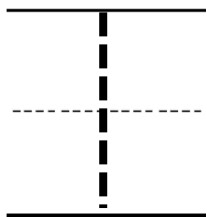
4

5

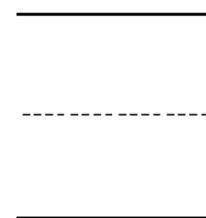
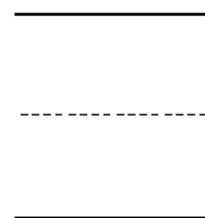
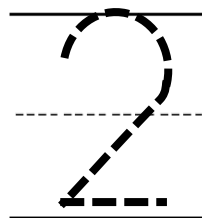
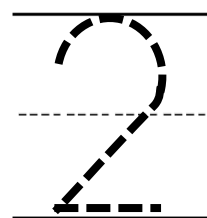
There are zero fish in the fish bowl.



There is one fish in the fish bowl.



Rashad is wearing his two blue socks.



- 1 Listen to how many objects there are.
- 2 Write the number of objects.
- 3 Write the number of objects four more times.

0

1

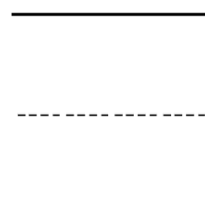
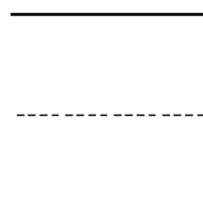
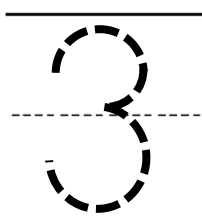
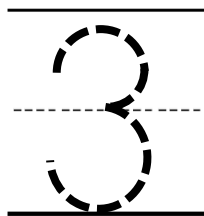
2

3

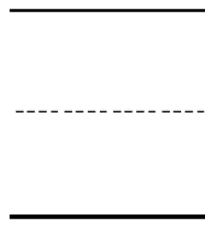
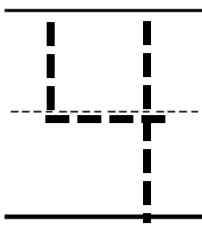
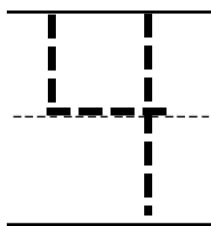
4

5

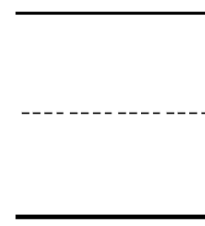
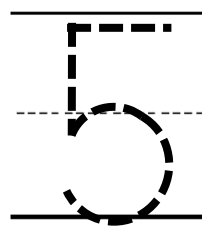
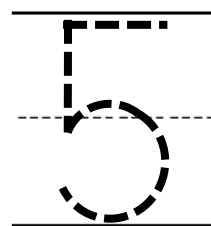
Humberto saved three dollars.



The window has four squares.





Renaldo played with five blocks.



A **number** is a way to **write** an **amount of objects**.


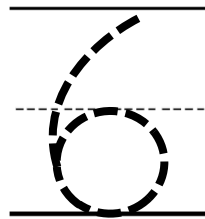
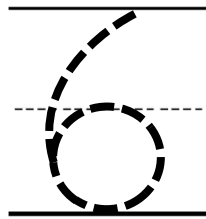
6 7 8 9 10



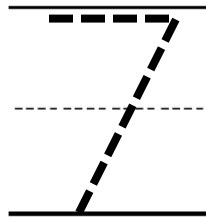
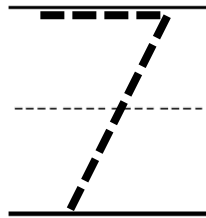
- 1 Listen to how many objects there are.
- 2 Write the number of objects.
- 3 Write the number of objects four more times.

1	2	3	4	5
6	7	8	9	10

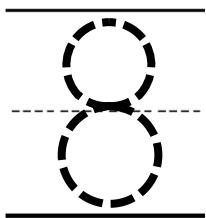
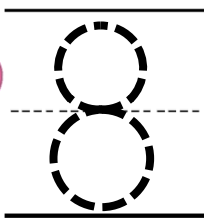

There are six pencils.



Seven pumpkins were left after Halloween.



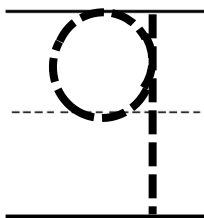
Kou shared eight pieces of gum.



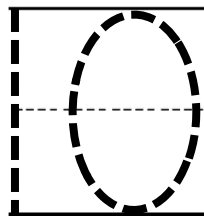
- 1 Listen to how many objects there are.
- 2 Write the number of objects.
- 3 Write the number of objects four more times.

1	2	3	4	5
6	7	8	9	10

Angelica had nine nickels in her pocket.




Isaiah counted ten fingers on his hands.




## Skill Closure

Count the numbers.

Write the numbers 1 – 10.

1	2	3	4	5	6	7	8	9	10
---	---	---	---	---	---	---	---	---	----

_____	_____	_____	_____	_____	_____
-----	-----	-----	-----	-----	-----
_____	_____	_____	_____	_____	_____
0	1	2	3	4	5
-----	-----	-----	-----	-----	-----
_____	_____	_____	_____	_____	_____
6	7	8	9	10	

## Summary Closure

What did you learn today about writing numbers to 10?

### Word Bank

amount  
numbers

Count the numbers 0 to 10.

Write numbers 0 to 10.

1	2	3	4	5	6	7	8	9	10
---	---	---	---	---	---	---	---	---	----

_____	_____	_____	_____	_____	_____
-----	-----	-----	-----	-----	-----
_____	_____	_____	_____	_____	_____
0	1	2	3	4	5
-----	-----	-----	-----	-----	-----
_____	_____	_____	_____	_____	_____
6	7	8	9	10	

2 Write numbers as you count.

How many **strawberries** are there?



_____
-----
_____

_____
-----
_____

_____
-----
_____



Count the numbers 0 to 10.

Write numbers 0 to 10.

1	2	3	4	5	6	7	8	9	10
---	---	---	---	---	---	---	---	---	----

0	1	2	3	4	5
6	7	8	9	10	

Amy did not write some of her numbers correctly.

Circle the incorrect numbers.

1	2	3	4	5
6	7	8	9	10

Help her write them correctly below.


Count the numbers 0 to 10.

Write the missing numbers.

1	2	3	4	5	6	7	8	9	10
---	---	---	---	---	---	---	---	---	----

0

1

3

4

5

6

7

9

1 Write numbers as you count.

How many pieces of **broccoli** are there?








Count the numbers 0 to 10.

Write numbers 0 to 10.

1	2	3	4	5	6	7	8	9	10
---	---	---	---	---	---	---	---	---	----

_____	_____	_____	_____	_____
-----	-----	-----	-----	-----
_____	_____	_____	_____	_____
_____	_____	_____	_____	_____
-----	-----	-----	-----	-----
_____	_____	_____	_____	_____

Write numbers as you count.

How many **apples** are there?



_____	_____	_____	_____	_____
-----	-----	-----	-----	-----
_____	_____	_____	_____	_____
_____	_____	_____	_____	_____
-----	-----	-----	-----	-----
_____	_____	_____	_____	_____