

Weight is how heavy an object is.

- ▶ **Heavier** objects have **more** weight.
- ▶ **Lighter** objects have **less** weight.

Comparing weight



apple
less weight, lighter



watermelon
more weight, heavier

- 1 Look at both objects.
- 2 Identify the heavier object. (circle)
- 3 Compare the weight of objects. (“__ is heavier than __ because...”)

1.

A stapler



B

paperclip



2.

ant

A



cat


B



3.

A bus

A



car


B



4.

A smartphone

A



television

B

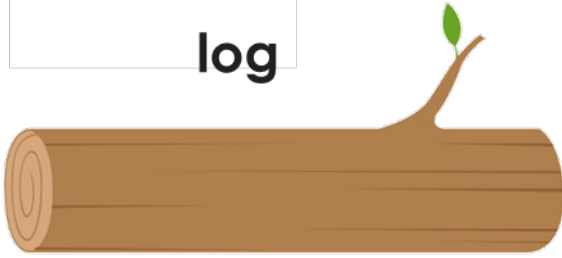


- 1 Look at both objects.
- 2 Identify the lighter object. (circle)
- 3 Compare the weight of objects. (“__ is heavier than __ because...”)

1.

A

log



B

stick



2.


A

bat



B

carrot



3.

A

skateboard



B

bicycle



4.


A

key



B


hammer



Skill Closure

- 1 Look at each object.
- 2 Read the directions.
- 3 Compare the weight of objects.

1. Circle the heavier object.



2. Circle the lighter object.




Concept Closure

Say a sentence to compare the objects below using the word "lighter".

A peanut



B potato



Summary Closure

What did you learn today about comparing the weight of objects?

Word Bank

weight
heavier
lighter

Circle the heavier object.

1.

fly



A

squirrel



B

2.

shark



A

fish



B

Circle the lighter object.

3.

nail



A

wrench



B

4.

chameleon



A

cockroach



B

Speaking 

Say Tom is moving boxes of paper. Which box will be easier for him to carry?

A



B



Listening



Listen to the question. Look at the picture. Answer the question.

1. "The _____ is heavier than the _____."
2. "The _____ is lighter than the _____."
3. "The _____ is lighter than the _____."
4. "The _____ is heavier than the _____."

Compare the weight of objects.

5. Which fruit is heavier?

A apple

B cherry



6. Which train is lighter?

A




B



Compare the weight of objects.

1. Thaddeus needs to move some rocks in his garden. Would it be easier for him to move the large rocks or the small ones by himself? Explain.



2. Mr. King is moving his books to a new classroom. Which stack would be too hard to carry? Explain.

A



B



3. Linda's backpack is heavier than her little sister's. Which backpack is Linda's? Explain.

A



B




4. Which animal is heavier?

A horse



B elephant



5. Which box of colored pencils is lighter?

A




B




Compare the weight of objects.

1. John has a large book in his bag. Mary has a pencil in her bag. Mary says her bag is heavier than John's bag. Is Mary correct? Explain.



2. Akio has a rabbit for a pet. Imani has a mouse. Whose pet would be more difficult to lift? **rabbit** Explain.



3. Which object is heavier?

A juice carton



B glass of juice



4. Which is lighter?

A leaf




B tree



5. Ana wants a fish that is NOT too heavy for her aquarium. Which one should she buy? Explain.

A



B

