


A **triangle** is a shape.

▶ A **triangle** can be turned or have different sizes.


Triangle

- ✓ 3 straight sides
- ✓ 3 corners

Triangles




NOT Triangles




1 Look at the shapes.

2 Name the triangles. "It is a triangle because ____."


1




2



3



4





A **rectangle** is a shape.

▶ A **rectangle** can be turned or have different sizes.


Rectangles

- ✓ 4 straight sides
- ✓ 4 corners

Rectangles



NOT Rectangles



1 Look at the shapes.

2 Name the rectangles. "It is a rectangle because ____."


1




2



3



4






A **circle** is a shape.

▶ A **circle** can be turned or have different sizes.



Circles

- ✓ No straight sides
- ✓ No corners

Circles




NOT Circles




1 Look at the shapes.

2 Name the circle. "It is a circle because ____."

1



2



3



4



Skill Closure


1 Look at the shapes.

2 Name the triangles. "It is a triangle because ____."

1



2



Concept Closure

Name two shapes to describe the house.



Summary Closure

What did you learn today about naming shapes?

Word Bank

triangle
rectangle
circle


1 Look at the shapes.

2 Name the rectangles. "It is a rectangle because ____."

1




2




1 Look at the shapes.

2 Name the circle. "It is a circle because ____."

3









4



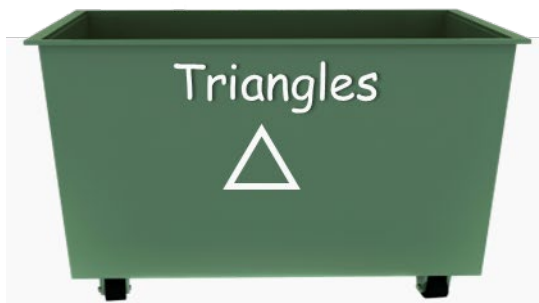
Listening



Listen to the description of the shape.
Determine it is True or not True.

1		
2		
3		

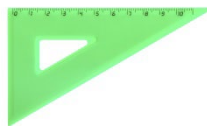
Are the shapes triangles?



Are the shapes rectangles?



Marco is looking to name as many shapes as he can in his classroom. Help him by matching the object to correct shape name.


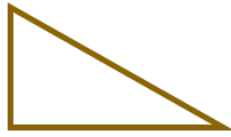



Triangle

Rectangle

Circle

Are the shapes circles?



Heidi is seeking the names of as many shapes as she can in her bedroom. Help her by matching the object to the correct shape name.



Triangle

Rectangle

Circle