

To **compare** means **one group** can be “**less than**” or “**greater than**” another group.

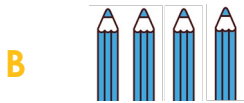

## Compare Words

Less than – fewer  
Greater than – more



## Check for Understanding

Which group has **fewer pencils**? How do you know?



Which group has **fewer apples**? How do you know?



- 1 Count the objects in each group. (write or say)
- 2 Identify the group that has fewer objects. (A or B)
- 3 Explain.

1

A



party hats

\_\_\_\_\_

\_\_\_\_\_

\_\_\_\_\_

B



party bags

\_\_\_\_\_

\_\_\_\_\_

\_\_\_\_\_

2

A



red markers

\_\_\_\_\_

\_\_\_\_\_

\_\_\_\_\_

B



blue markers

\_\_\_\_\_

\_\_\_\_\_

\_\_\_\_\_

3

A



basketballs

\_\_\_\_\_

\_\_\_\_\_

\_\_\_\_\_

B



soccer balls

\_\_\_\_\_

\_\_\_\_\_

\_\_\_\_\_

4

A



oranges

\_\_\_\_\_

\_\_\_\_\_

\_\_\_\_\_

B



apple

\_\_\_\_\_

\_\_\_\_\_

\_\_\_\_\_

To **compare** means **one group** can be “**less than**” or “**greater than**” another group.

## Compare Words

Less than – fewer

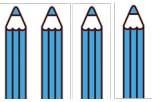
Greater than – more



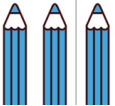
## Check for Understanding

Which group has **more pencils**? How do you know?

A



B



Which group has **more apples**? How do you know?

A



B



- 1 Count the objects in each group. (write or say)
- 2 Identify the group that has fewer objects. (A or B)
- 3 Explain.

1

A



party hats

-----

-----

B



party bags

-----

-----

2

A

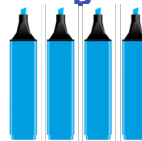


red markers

-----

-----

B



blue markers

-----

-----

3

A



basketballs

-----

-----

B



soccer balls

-----

-----

4

A




oranges

-----

-----

B




apple

-----

-----

## Skill Closure

- 1 Count the objects in each group. (write or say)
- 2 Identify the group that has fewer objects. (A or B)
- 3 Explain.



flowers


---



---



---



leaves


---



---



---



flowers


---



---



---



leaves

---



---



---

## Concept Closure

Mike has 5 marbles. James has 2 marbles.

Mike says he has more marbles than James? Is he correct?



## Summary Closure

What did you learn today about comparing the number of objects in groups?

### Word Bank

- ▶ compare
- ▶ group
- ▶ less than
- ▶ greater than

Count the number of objects.  
Circle the group that has more objects.

1.



sunglasses



hats

2.



starfish



fish

Count the number of objects.  
Circle the group that has fewer objects.

3.



plants



rock

4.



desk



chairs



## Listening

Listen carefully to the problem.  
Use your whiteboard to answer.





## Reading

Read the text. Answer the questions.


Pets can be dogs or cats.  
Mat has dogs. Kim has a cat.  
Mat has a big dog and a black dog.  
Kim has a black cat.

Who has fewer pets?



Pets can be dogs or cats.  
Mat has dogs. Kim has a cat.  
Mat has a big dog and a black dog.  
Kim has a black cat.

Who has more pets?








## Writing


Write the number of objects.  
Circle the group that has more objects.



\_\_\_\_\_

-----

\_\_\_\_\_



\_\_\_\_\_

-----

\_\_\_\_\_



\_\_\_\_\_

-----

\_\_\_\_\_



\_\_\_\_\_

-----

\_\_\_\_\_



\_\_\_\_\_

-----

\_\_\_\_\_



\_\_\_\_\_

-----

\_\_\_\_\_



\_\_\_\_\_

-----

\_\_\_\_\_



\_\_\_\_\_

-----

\_\_\_\_\_